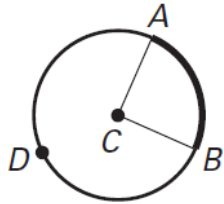


Name: _____ Date: _____

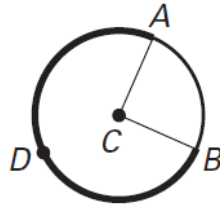
Central Angles Classwork – Practice

Name the arc shown in bold and classify it (minor, major, or semi).

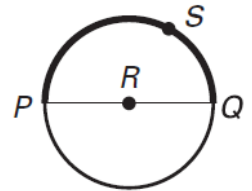
1.



2.



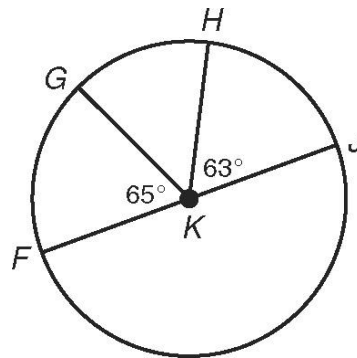
3.



Find each measure.

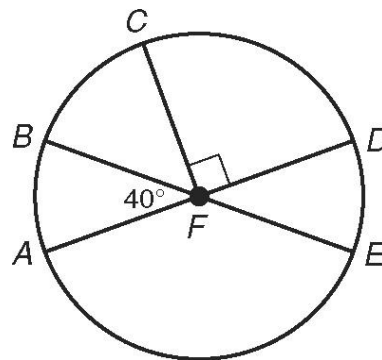
4. $m \widehat{HJ}$ _____

5. $m \widehat{FH}$ _____



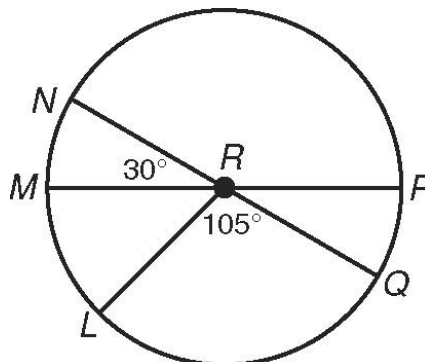
6. $m \widehat{CE}$ _____

7. $m \widehat{BD}$ _____

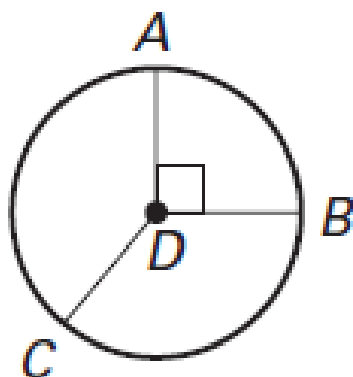


8. $m \widehat{LN}$ _____

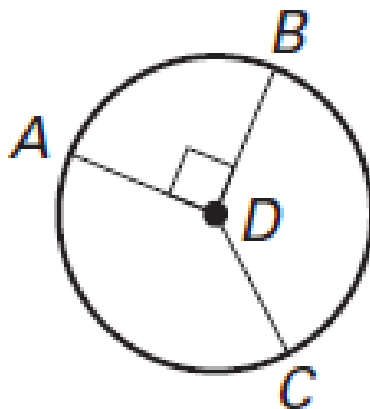
9. $m \widehat{LNP}$ _____



10. $m \widehat{AB}$ _____



11. $m \widehat{ACB}$ _____



12. $m \widehat{CA}$ _____ Type equation here.

