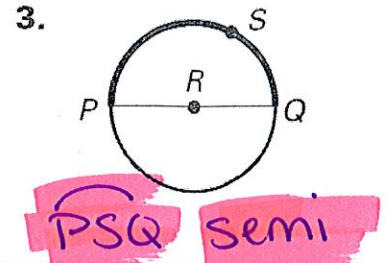
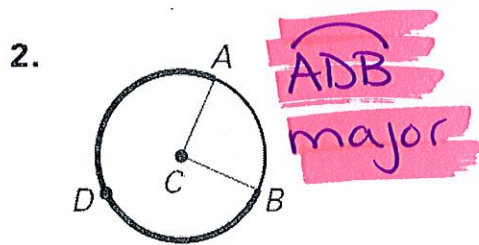
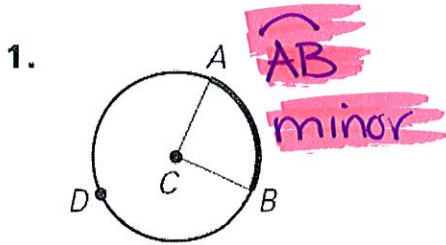


Name: _____ Date: _____

Central Angles Classwork - Practice

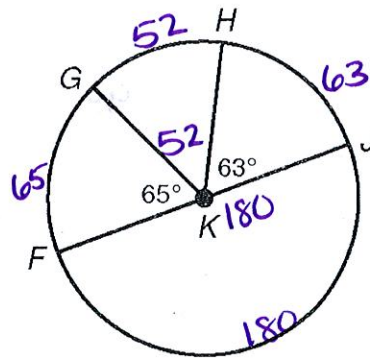
Name the arc shown in bold and classify it (minor, major, or semi).



Find each measure.

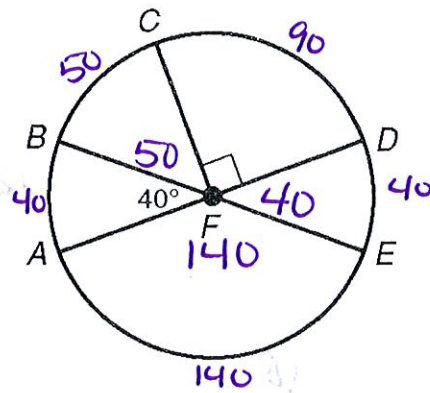
4. $m\widehat{HJ}$ 63

5. $m\widehat{FH}$ 117
 $65 + 52$



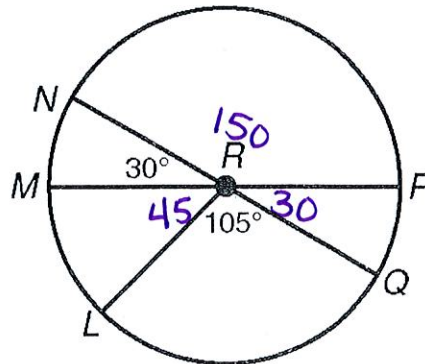
6. $m\widehat{CE}$ 130 $90 + 40$

7. $m\widehat{BD}$ 140 $50 + 90$

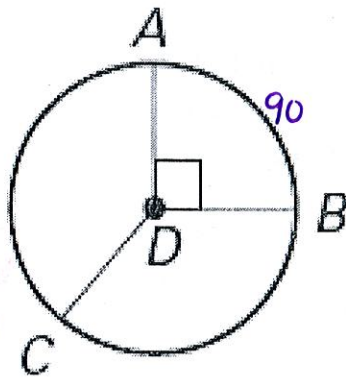


8. $m\widehat{LN}$ 75 $45 + 30$

9. $m\widehat{LNP}$ 225 $45 + 30 + 150$

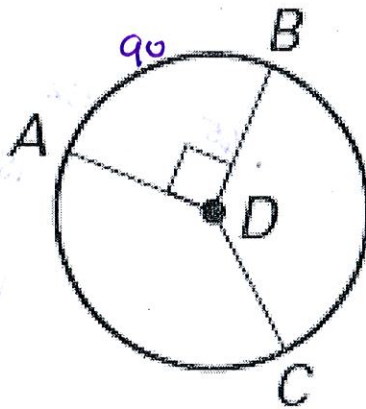


10. $m\widehat{AB}$ 90



11. $m\widehat{ACB}$ 270

$360 - 90$



12. $m\widehat{CA}$ 120

$\frac{360}{3}$

