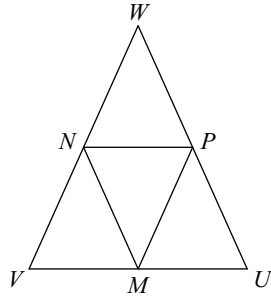


Midsegment Practice

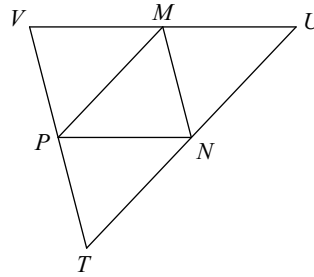
In each triangle, M, N, and P are the midpoints of the sides. Name a segment parallel to the one given.

1)



_____ $\parallel \overline{UW}$

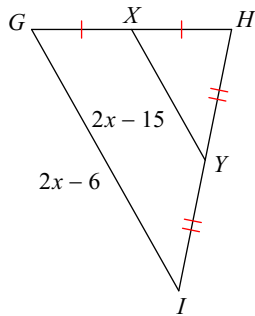
2)



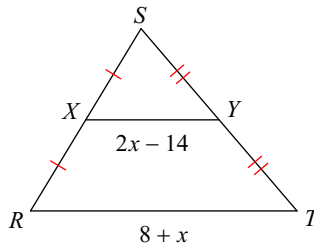
_____ $\parallel \overline{VU}$

Solve for x .

3)

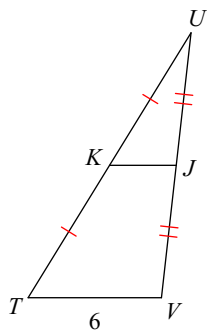


4)

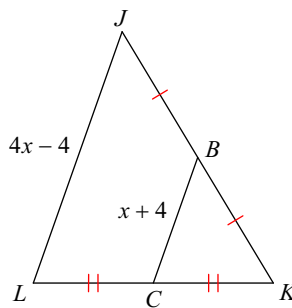


Find the missing length indicated.

5) Find KJ



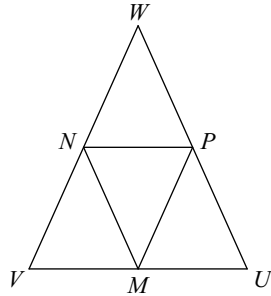
6) Find JL



Midsegment Practice

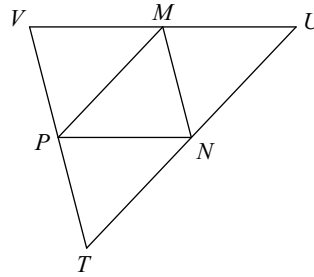
In each triangle, M, N, and P are the midpoints of the sides. Name a segment parallel to the one given.

1)



$\underline{\quad} \parallel \overline{UW}$
 $\underline{\overline{MN}}$

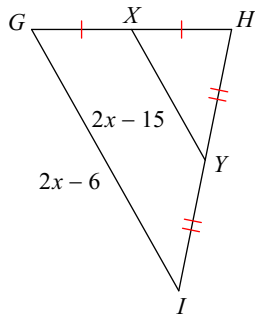
2)



$\underline{\quad} \parallel \overline{VU}$
 $\underline{\overline{NP}}$

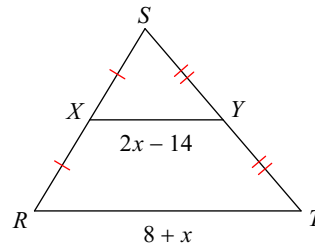
Solve for x.

3)



12

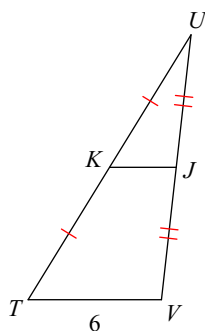
4)



12

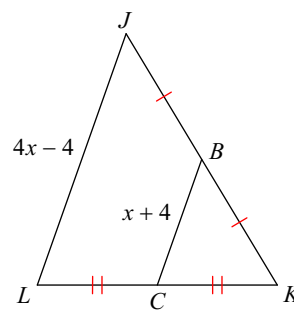
Find the missing length indicated.

5) Find KJ



3

6) Find JL



20