

CW/HW

Find each angle measure to the nearest degree.

1)  $\tan A = 0.0349$

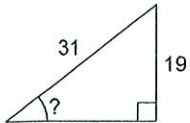
2)  $\cos A = 0.9272$

3)  $\tan A = 0.8693$

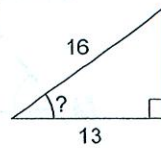
4)  $\tan A = 5.1446$

Find the measure of the indicated angle to the nearest degree.

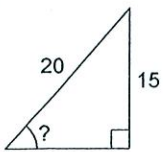
5)



6)



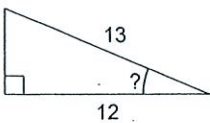
7)



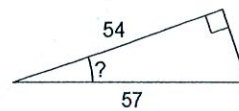
8)



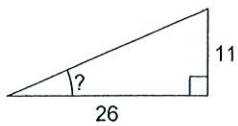
9)



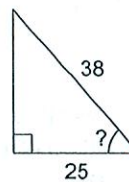
10)



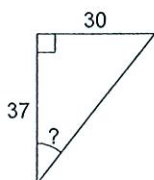
11)



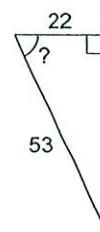
12)



13)



14)



15)

