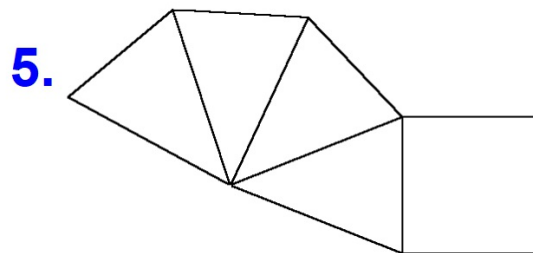
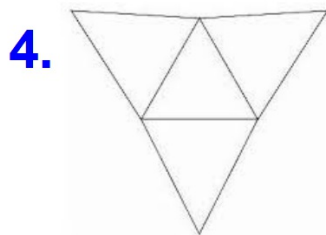
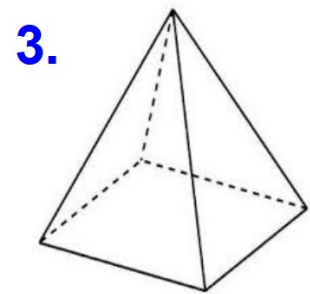
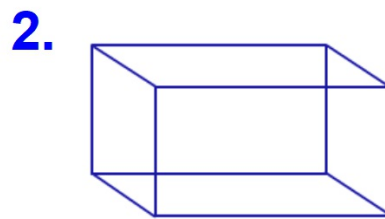
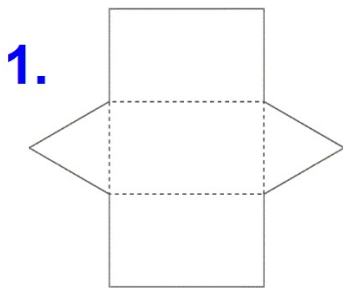


## Warm-up 2/26

Name each of the following figures. Your choices are:

triangular prism  
square pyramid

rectangular prism  
triangular pyramid



## 2.26 Volume Activity

- 1: **COLOR AND CUT** out 2 figures. Then fold along the outside lines only
- 2: Fold figure in same direction along **ALL** lines
- 3: Measure the **LENGTH, WIDTH, AND HEIGHT** of each figure.
- 4: Find the **VOLUME** of each figure and write on a separate sheet of paper **SHOW ALL WORK** (label by type of figure, such as "triangular prism")