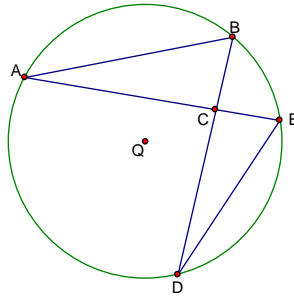


Questions 1 and 2 refer to the figure below. Use the given information about circle Q to answer questions 1 and 2.

**Given**  $m\widehat{AB} = 124$   
 $m\widehat{BE} = 46$   
 $m\widehat{ED} = 75$



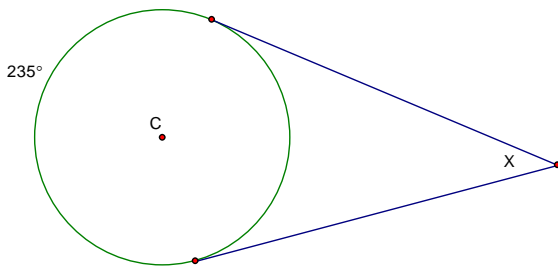
1. Find  $m\angle ABD =$

2. Find  $m\angle BDE =$

[G.C.2]

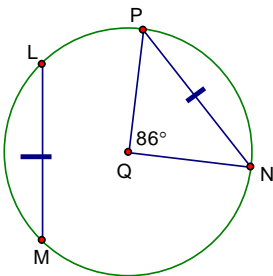
3. Use the given information below to determine the value of x.

[G.C.2]



4. Use the given information in the diagram below to find  $m\widehat{LM}$

[G.C.2]

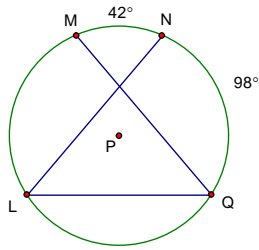


5. What is the definition of a minor arc?

[G.C.2]

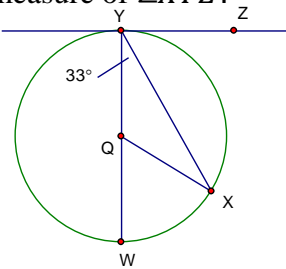
6. In the circle below, P is the center. What is the measure of  $\angle NLQ$ ?

[G.C.2]



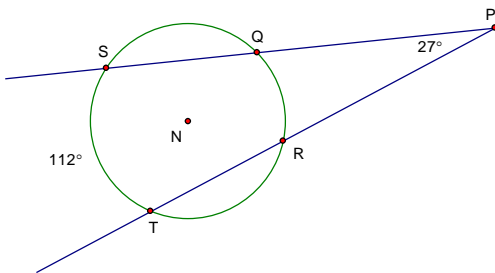
7. In the circle below,  $\overline{YZ}$  is tangent to the circle at point Y, and  $\overline{WY}$  is a diameter. What is the measure of  $\angle XYZ$ ?

[G.C.2]

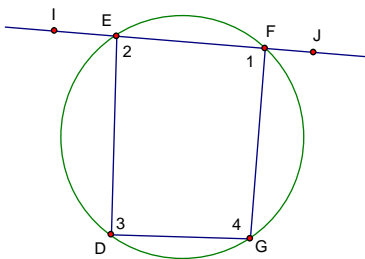


8. In the circle below, N is the center. The measure of  $\angle P$  is  $27^\circ$  and the measure of

What is the measure of  $\widehat{QR}$ ?



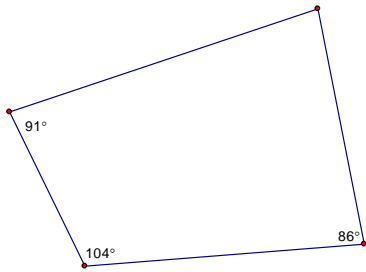
9. Given:  $m\angle 2 = 35^\circ$  and  $m\angle 1 = 80^\circ$ , find the measure of each unknown angle. [G.C.3]



10. Are circles always similar? Explain your reasoning.

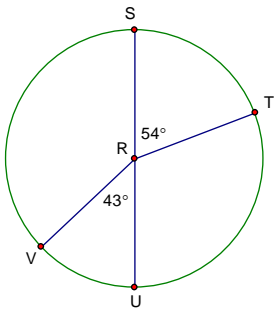
11. Can this quadrilateral be inscribed in a circle?

[G.C.3]



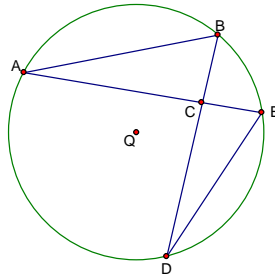
12. In the figure,  $\overline{US}$  is a diameter of circle R. What type of arc is  $\widehat{STU}$ ?

[G.C.2]

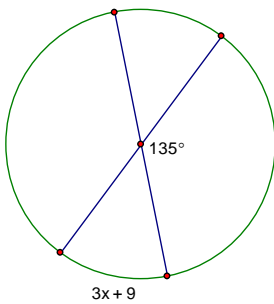


13. Use the information below about circle Q to find  $m\angle ACB$ .

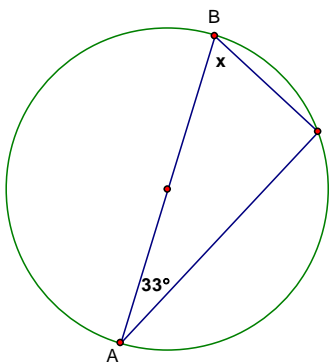
$$\begin{aligned} m\widehat{AB} &= 124 \\ m\widehat{BE} &= 46 \\ m\widehat{ED} &= 75 \end{aligned}$$



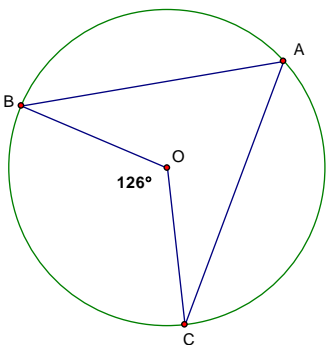
14. Solve for x. The lines drawn are diameters to the circle.



15. Given diameter  $\overline{AB}$ , find  $x$ .

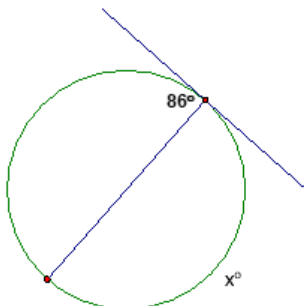


16. Given circle O below, determine  $m\angle BAC$ .

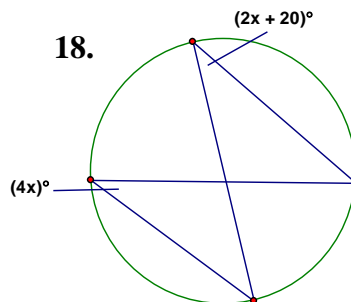


For questions 17 and 18 below, determine the value of  $x$ .

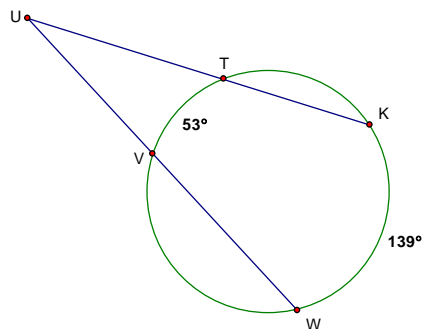
17.



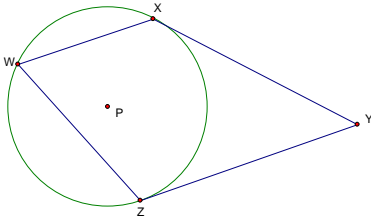
18.



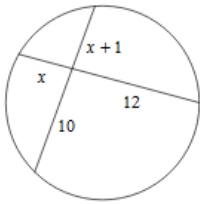
19. Find the measure of  $\angle WUK$ .



20. Circle P has tangents  $\overline{XY}$  and  $\overline{ZY}$  and chords  $\overline{WX}$  and  $\overline{WZ}$ , as shown in this figure. The measure of  $\angle ZWX = 70^\circ$ . What is the measure, in degrees, of  $\angle XYZ$ ?



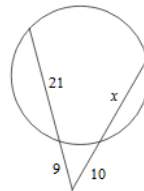
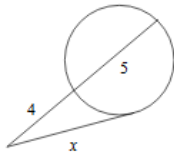
21. Solve for x.



22. For a-c, fill in the word that best fits the given definition.

- a) A segment whose endpoints are on the circle is called a \_\_\_\_\_.
- b) A segments that touches a circle at 2 points is called a \_\_\_\_\_.
- c) A segment that touches a circle at one point is called a \_\_\_\_\_.

23. For each of the following, solve for x.



24. Two secants are drawn from the point P outside the circle. The external segment of the first secant segment (PB) is 6 inches and its internal segment (AB) is 5 inches. If the entire length of the second secant segment (EP) is 22 inches, what is the length of its external segment (PD)?

